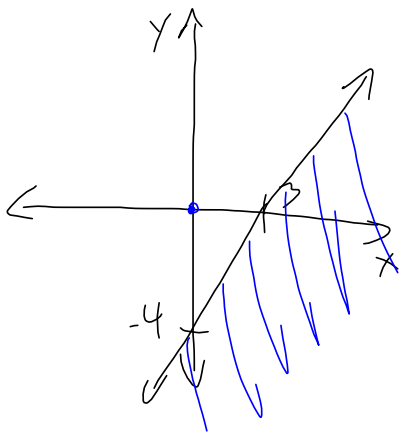
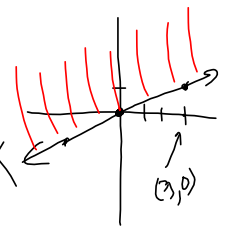


Graph each inequality on separate grids.

$$4x - 3y \geq 12$$

$$y \geq \frac{2}{3}x - 4$$

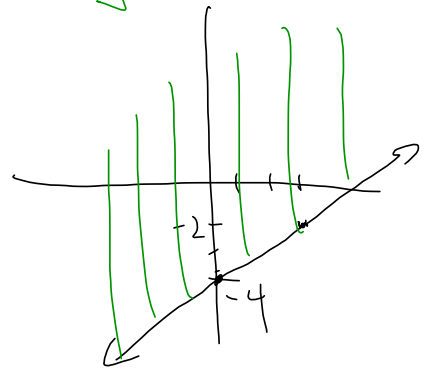
$$y \geq \frac{1}{3}x$$



$$4x - 3y = 12$$

x	y
0	-4
3	0

x	y
0	-4
3	-2



Let x be the # of Flexscan sets produced.

Let y " " " " Panoramic I sets produced.

